



# LEGO ADDITION!

Add the legos together to find the sum. Use the example to help you.

Example:  +  = 7

1.  +  = \_\_\_\_\_

2.  +  = \_\_\_\_\_


3.  +  = \_\_\_\_\_

4.  +  = \_\_\_\_\_

5.  +  = \_\_\_\_\_

6.  +  = \_\_\_\_\_

7.  +  = \_\_\_\_\_

8.  +  = \_\_\_\_\_

9.  +  = \_\_\_\_\_

10.  +  = \_\_\_\_\_